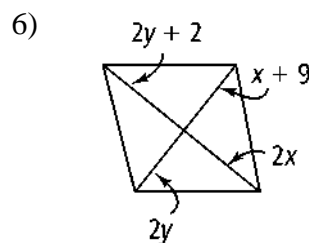
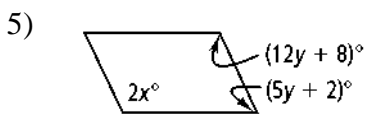
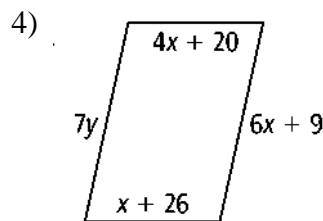
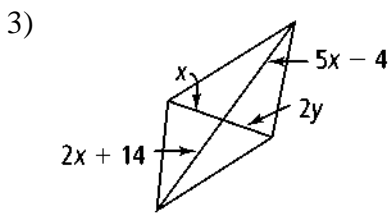
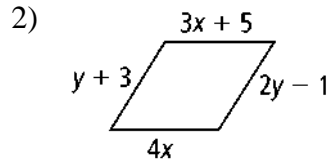
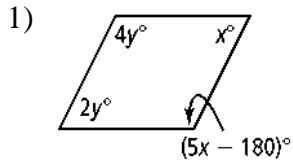


6.3 – Proving Quadrilaterals are Parallelograms

For what values of x and y make the quadrilateral a parallelogram?

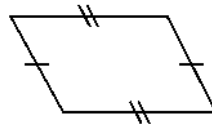


Can you prove that the quadrilateral is a parallelogram based on the given information? Explain.

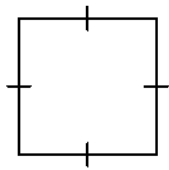
7)



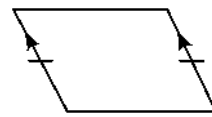
8)



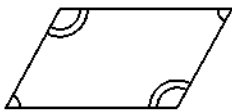
9)



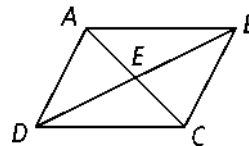
10)



11)



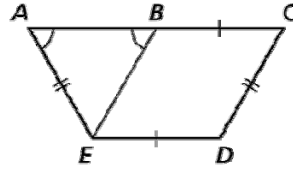
12) $\overline{AE} \cong \overline{EC}, \overline{BE} \cong \overline{ED}$



13) Write a two-column proof.

Given: $\angle A \cong \angle ABE$
 $\overline{AE} \cong \overline{CD}$, $\overline{BC} \cong \overline{DE}$

Prove: $BCDE$ is a parallelogram.

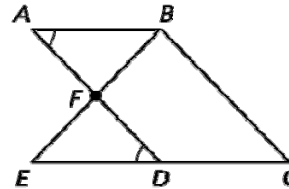


Statement

Reasons

14) Write a two-column proof.

Given: $\angle A \cong \angle FDE$
 F is the midpoint of \overline{AD} .
 D is the midpoint of \overline{CE} .
 Prove: $ABCD$ is a parallelogram.

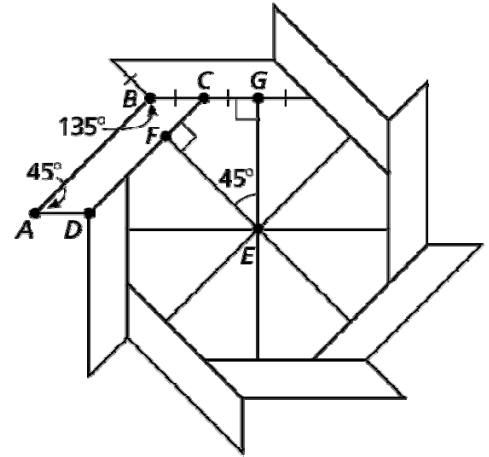


Statement

Reasons

15) An octagon star is shown in the figure on the right.

a) Find $m\angle FCG$, $m\angle BCF$, and $m\angle D$.



b) State which theorem you can use to show that the quadrilateral is a parallelogram.

c) The length of \overline{AB} is three times the length of \overline{AD} . Write an expression for the perimeter of parallelogram $ABCD$ in terms of the variable x .